

NAME	INDEX NUMBER
SCHOOL	DATE _____

TRANSPORT AND COMMUNICATION

1. 1993 Q 3(b-d)

b) Apart from transportation, list four economic uses of rivers in Africa.

.....
.....
.....
.....

c) Explain five factors that have hindered the development of river transport in Africa.

.....
.....
.....
.....

d) Explain why road transport in Africa is better developed than railway transport.

.....
.....
.....
.....

2. 1994 Q 3b

b) State three ways in which the Great Lake and St. Lawrence Sea Way has contributed to the economy of Canada and United States of America.

.....
.....
.....
.....

3. 1996 Q 1c, d (Sec B)

c) Explain why there are few railway links among African countries (6 marks)

.....

.....

.....

.....

.....

.....

d) Explain three ways through which Kenya has benefited from her international airports. (6 marks)

.....

.....

.....

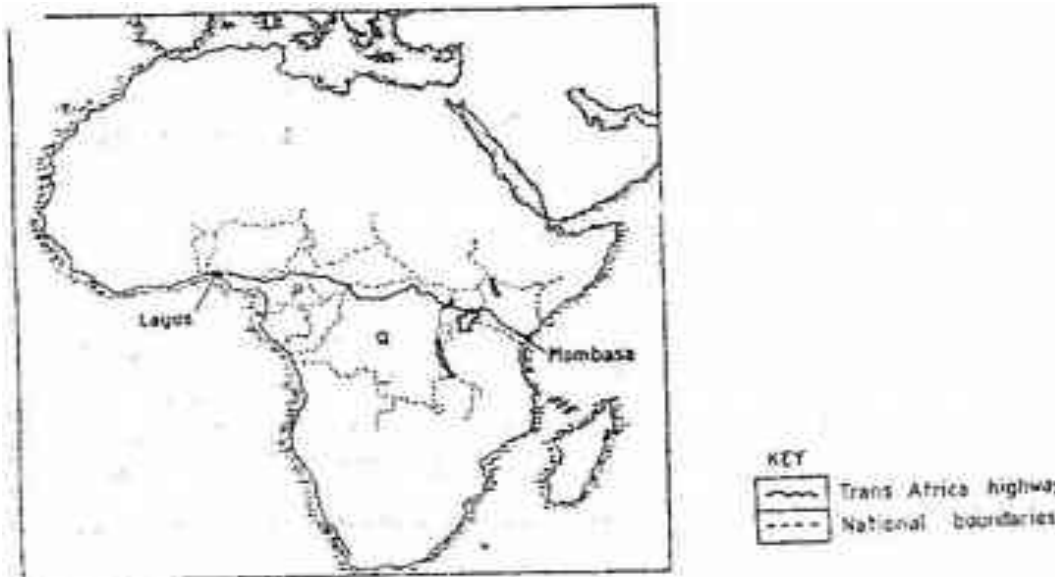
.....

.....

.....

4. 1997 Q 8

The map below shows the transport- Africa highway from Mombasa to Lagos. Use it to answer question (a)



a) i) Name the countries marked P and Q

.....
.....
..

ii) State three reasons why it is difficult to transport goods from Mombasa to Lagos along the highway.

.....
.....
.....
...

b) Explain three problems facing rail transport in Kenya.

.....
.....
.....
.....
.....
.....
.....
.....
.....

c) Explain four ways through which the Kenyan government promotes internal trade.

.....
.....
.....
.....
.....
.....
.....
.....
.....
.....
.....

d) Explain the three ways through which Kenya is likely to benefit from renewed East African Co-operation.

(i) Name the towns marked X and Y which are served by pipeline

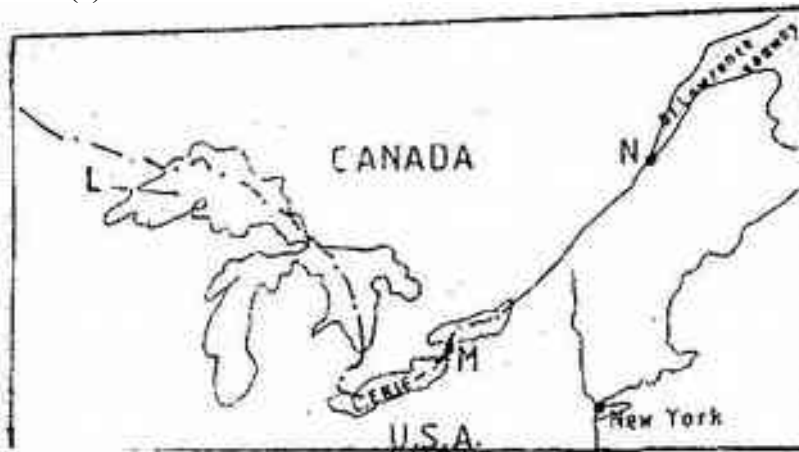
.....
.....
..

(ii) State two disadvantages of using pipelines as means of transporting oil

.....
.....
..

7. 2001 Q 8

Below a sketch of the map of the great lakes- St. Lawrence Seaway. Use it to answer question (a)



(a) Name (i) The lake marked L

.....

(ii) The waterfall marked M

.....

(iii) The port marked N

.....
(b) Explain three ways in which the great lakes St. Lawrence sea way has contributed to the economy of Canada and the United States of America (U.S.A)

.....
.....
.....
.....
.....
.....

(c) Explain four factors that hinder the development of railway links among Africa countries

.....
.....
.....
.....
.....
.....
.....

(d) (i) State two recent development that have taken place in Kenya to improve Communication of information

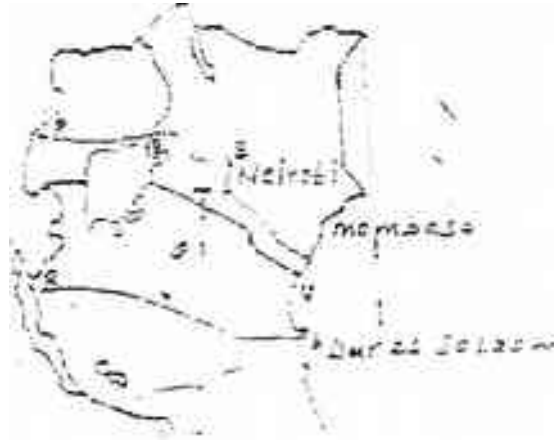
.....
.....
..

(ii) Explain three problems facing telephone as a means of communication in Kenya

.....
.....
.....
.....
.....
.....

8. 2004 Q 7a, b

Use the map of East Africa below to answer questions (s).



a) (i) Name the railway terminuses marked P, Q R (3 marks)

.....

...

(ii) In each case give the main commodity transported by the railway lines marked S and T. (2 marks)

.....

b) (i) State four reasons why road network is more widespread than railways in East Africa. (4 marks)

.....

....

(ii) One of the problems facing road transport is the high frequency of accidents. Explain four conditions of roads in Kenya that may lead to accidents. (8 marks)

.....

.....

9. 2006 Q 1

(a) Differentiate between transport and communication (2 marks)

.....

 ...

(b) State three causes of the decline in the use of letter writing as means of communication in Kenya (3 marks)

.....

 ...

10. 2007 Q 4

Below is a sketch map showing part of the great Lakes and St. Lawrence Sea way. Use it to answer question (a).



a) Name (i) The port marked P. (1 mark)

.....

(ii) The canal marked Q (1 mark)

.....

(iii) The lake marked R (1 mark)

.....

b) State three ways in which the great lakes and st. Lawrence Sea way has contributed to the growth of industries in the region. (3 marks)

.....
.....
.....

11. 2007 Q 9

a) (i) Name three international airports in Kenya. (3 marks)

.....
.....
.....

(ii) Give four advantages of air transport over road transport. (4 marks)

.....
.....
.....
.....

b) Explain four measures that should be taken to improve road transport in Kenya (8 marks)

.....
.....
.....
.....
.....
.....
.....
.....

c) Explain why there are few rail links among African countries. (6 marks)

.....
.....
.....
.....
.....
.....
.....
.....

d) Give four reasons why there is limited use of river transport in Africa. (4 marks)

.....
.....
.....
.....

12. 2010 Q 5

a) Name two proposed major highways in Africa. (2 marks)

.....
.....

b) Give three reasons why it is not possible to transport goods by road directly between Mombasa and Lagos. (3 marks)

.....
.....
.....

13. 2012 Q9 P2

(a) (i) Identify the **three** types of inland waterways used for transport used in Africa? (3 marks)

.....
.....
.....

(ii) Give **four** reasons why the government of Kenya is expanding pipeline transport. (4 marks)

.....
.....
.....
.....

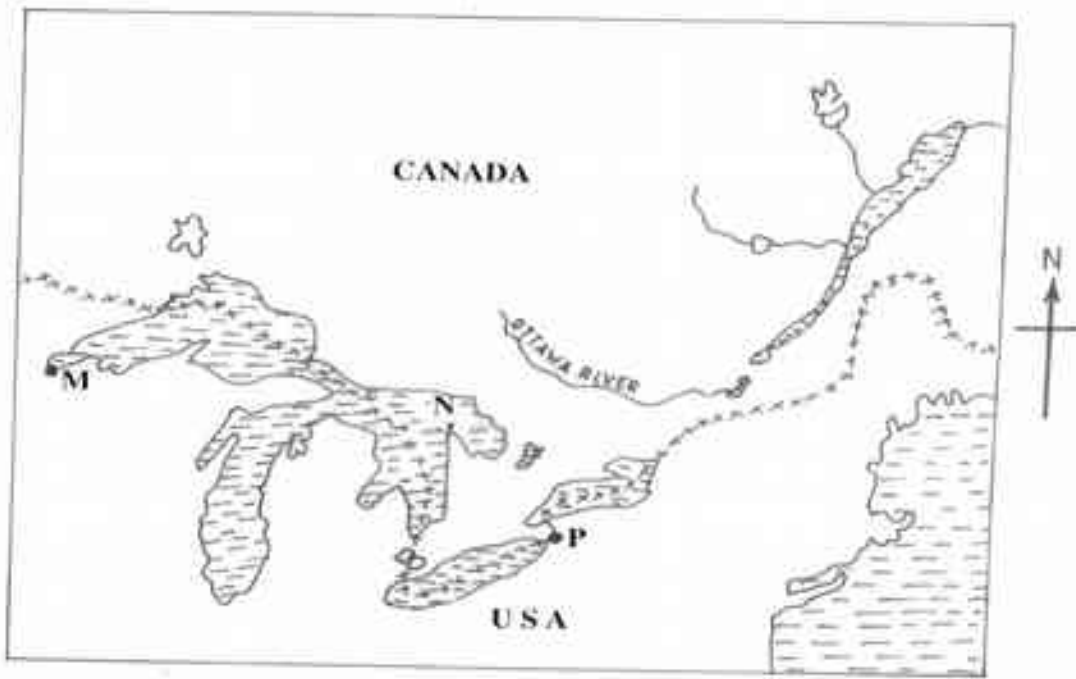
(b) (i) State **three** advantages of railway transport. (3 marks)

.....
.....
.....

(ii) State **four** conditions of roads in Kenya that may lead to motor vehicle accidents. (4 marks)

.....
.....
.....
.....

(c) The sketch map below shows the great lakes and St. Lawrence Seaway.
Use it to answer question C.



KEY:
 xxxxxx – International Boundary.

Name:

(i) The ports marked **M** and **P**. (2 marks)

.....

(ii) The Lake marked **N**. (1 mark)

.....

(c) Explain **four** benefits of the Great Lakes and St. Lawrence Seaway to the economics of USA and Canada. (8 marks)

.....
