

NAME	INDEX NUMBER
SCHOOL	DATE _____

MINING

1. 1991 Q 4

a) Name three methods of mining

.....
.....
.....

b) Describe how South Africa has benefited from gold mining

.....
.....
.....
.....

c) Explain five problems which Zaire encounters in exporting her copper.

.....
.....
.....
.....
.....
.....

2. 1997 Q 4

a) Name two conditions that are necessary for the formation of petroleum

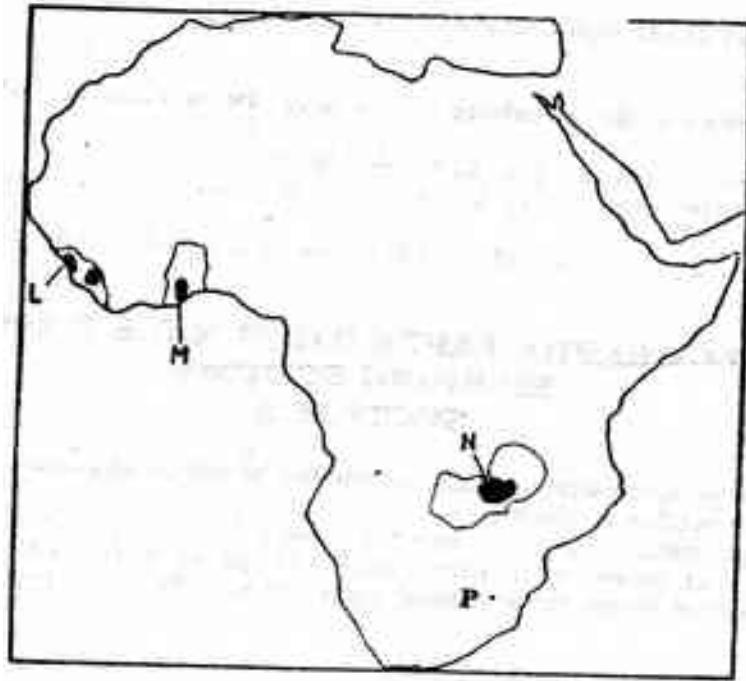
.....
.....
.....
.....

b) List three ways in which opencast mining affects the environment.

.....
.....
.....

3. 1998 Q 7

Use the map of Africa below to answer questions (a)



(a) Name:(i) The main minerals mined in the shaded area marked L,M,N (3 marks)

.....
.....
.....
...

(ii) The mining town marked P (1 mark)

.....

(b) (i) Apart from deep shaft mining, name three other mining methods (3 marks)

.....
.....
.....

(ii) Describe how shaft mining is carried out (6 marks)

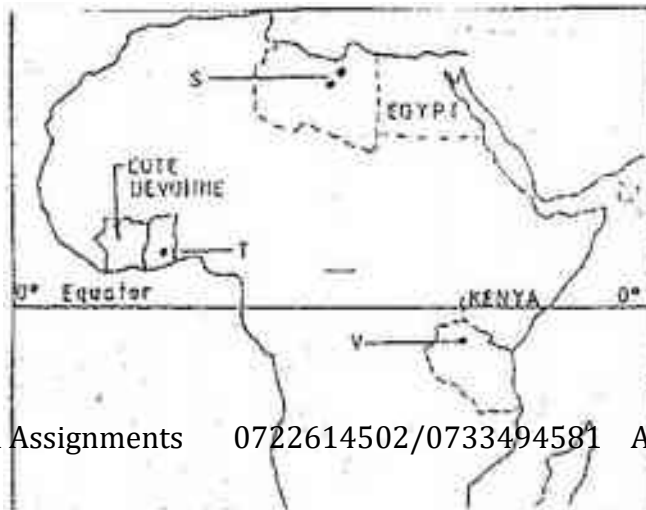
.....
.....
.....
.....
.....

(c) Explain four ways in which mining contributes to the economy of Kenya (8 marks)

.....
.....
.....
.....
.....
.....
.....
.....
.....
.....

4. 2002 Q 9

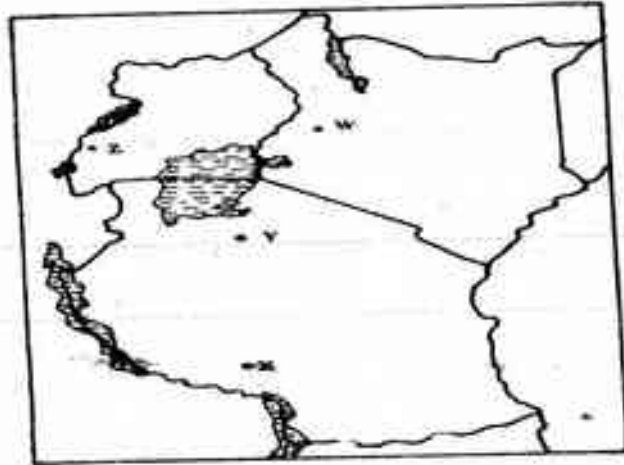
Use the map of Africa to answer question (a) (i)



.....
.....
.....
.....
.....
.....

5. 2005 Q 7

Use the map of East Africa below to answer question (a) (i)



a) Identify the mineral mined in the areas marked W, Z, X and Z (4 marks)

.....
.....
.....
.....

Name:

i) Three methods of mining (3 marks)

.....
.....
.....
.....

ii) Two sea ports through which some of the minerals mined in East Africa are exported. (2 marks)

.....
.....
..

b) State five factors that influence the exploitation of minerals (5 marks)

.....
.....
.....
.....
.....

c) Explain four ways in which soda ash contributes to the economy of Kenya (8 marks)

.....
.....
.....
.....
.....
.....
.....
.....
.....
.....

d) State three ways in which mining derelicts can be reclaimed (3 marks)

.....
.....
.....

5. 2012 Q1 P2

(a) What is mining? (2 marks)

.....
.....

(b) State **four** benefits of soda Ash mining to the economy of Kenya. (4 marks)

.....

.....

.....

.....