

Name

Index No...../.....

School.....

Candidate's sign.....

Date.....

443/1
AGRICULTURE
PAPER 1
JULY/AUGUST 2009
2 Hours

MANGA DISTRICT JOINT EVALUATION TEST - 2009

Kenya Certificate of Secondary Education (K.C.S.E)

443/1
AGRICULTURE
PAPER 1
JULY/AUGUST 2009
2 Hours

INSTRUCTIONS TO CANDIDATES

1. This paper consists of three sections: A, B and C
2. Answer ALL questions in section A and B in the spaces provided.
3. Answer ANY TWO questions in section C in the spaces provided.

FOR EXAMINER'S USE ONLY.

SECTION	QUESTIONS	MAXIMUM SCORE	CANDIDATE'S SCORE
A		30	
B		20	
C		20	
		20	
		TOTAL	

This paper consists of 12 printed pages. Candidates should check the questions to ensure that all pages are printed as indicated and no question(s) are missing

SECTION A (30 MARKS)

Answer all questions in this section in the spaces provided.

1. What is topping in pasture management? (1mk)
.....
.....
2. State **three** problems caused by a hard pan which develop in the sub-soil region within a soil profile. (1 ½ mks)
.....
.....
.....
3. Give **four** factors that determine the spacing of maize in the field. (2mks)
.....
.....
.....
4. State **three** disadvantages of communal land ownership. (1 ½ mks)
.....
.....
.....
5. Name any **two** types of terraces. (1mk)
.....
.....
6. State **two** physical methods of weed control in the farm. (1mk)
.....
.....
7. Give **one** reason for carrying out the following operations
- (a) Rolling the seedbed. (1mk)
.....
.....
- (b) Leveling the seedbed (1mk)
.....
.....
8. Distinguish between undersowing and oversowing as used in pasture production (2mks)

.....
.....
.....
.....

9. State **two** characteristics of a good root stock for grafting (2mks)

.....
.....
.....

10. (a) Give **three** parameters of National Economic development (3mks)

.....
.....
.....
.....
.....

(b) List **four** labour constraints as a factor of production (2mks)

.....
.....
.....

11. State **three** qualities of crops used in the preparation of green manure (3mks)

.....
.....
.....
.....
.....

12. Give **three** symptoms of sulphur deficiency in crops. (3mks)

.....
.....
.....
.....

13. Calculate the number of tea plants in three hectares (3ha) given that spacing is 150cm x 75cm and one seedling is planted in each hole. (3mks)

14. List **four** post-harvest practices carried out on cereal crops (2mks)

.....

.....


.....

.....

SECTION B (20 MARKS)

Answer ALL questions in the spaces provided.

15. Study the illustration below.



(a) Name the parts labelled

- J..... (½ mk)
- K..... (½ mk)
- L..... (½ mk)

(b) What is the function of the part labeled k.

(1mk)

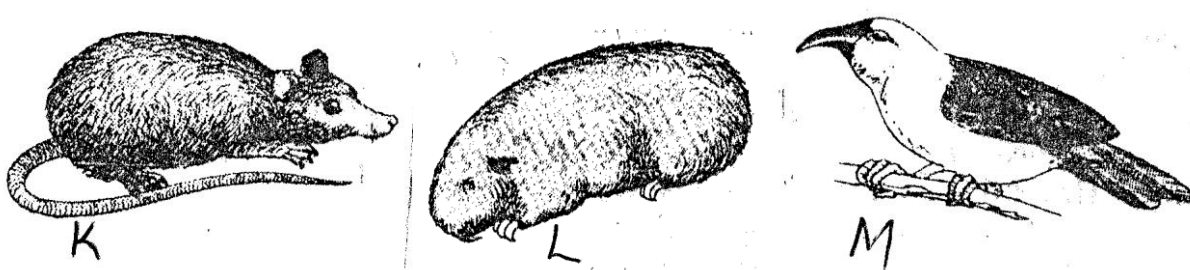
.....

(c) State **five** factors which affect the rooting of cuttings.

(2 ½ mks)

.....

16. Study the diagram below and answer questions that follow:



(i) Identify the pests

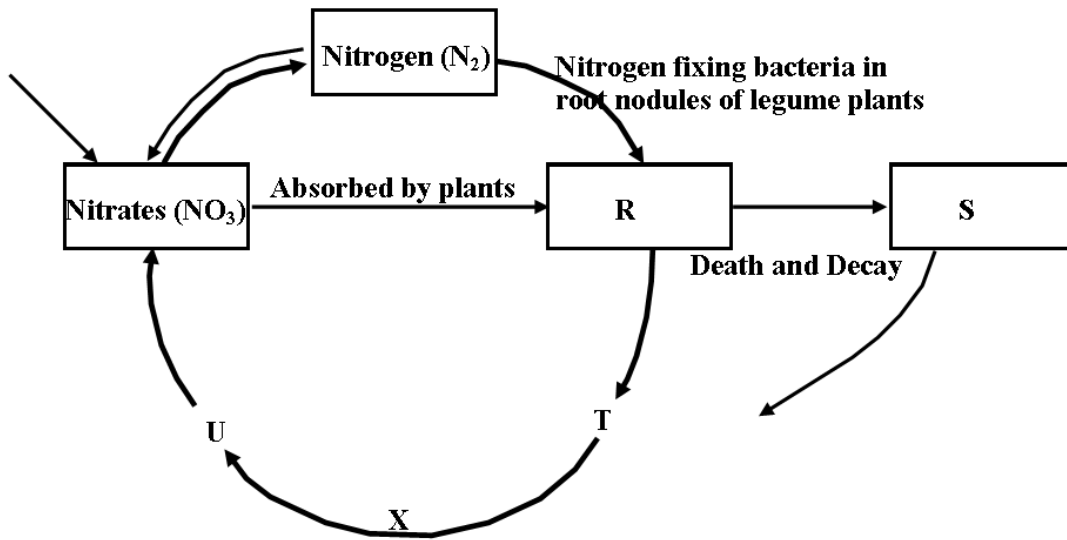
- K..... (½ mk)
- L..... (½ mk)
- M..... (½ mk)

(ii) Give **one** common method of controlling pests K and L.

(½ mk)

.....

17. Study the diagram of the Nitrogen cycle below



(a) Name the parts labelled

- R..... (½ mk)
- S..... (½ mk)
- T..... (½ mk)
- U..... (½ mk)

(b) Give the name of the bacteria x which operate between T and U. (1 mk)

.....

18. (a) Differentiate between solifluction and landslide. (2mks)

.....

(b) Name **four** types of landslides (2mks)

.....

19. State **four** advantages of crop rotation (2mks)

.....

20. Give **four** reasons for staking tomatoes

(4mks)

.....

.....

.....

.....

.....

.....

.....

.....

