

312/2
GEOGRAPHY
Paper 2
JUNE 2016
Time: 2¾ hours

KASSU-JET JOINT EXAMINATION
Kenya Certificate of Secondary Education
312/2
Paper 2
GEOGRAPHY

INSTRUCTIONS TO STUDENTS

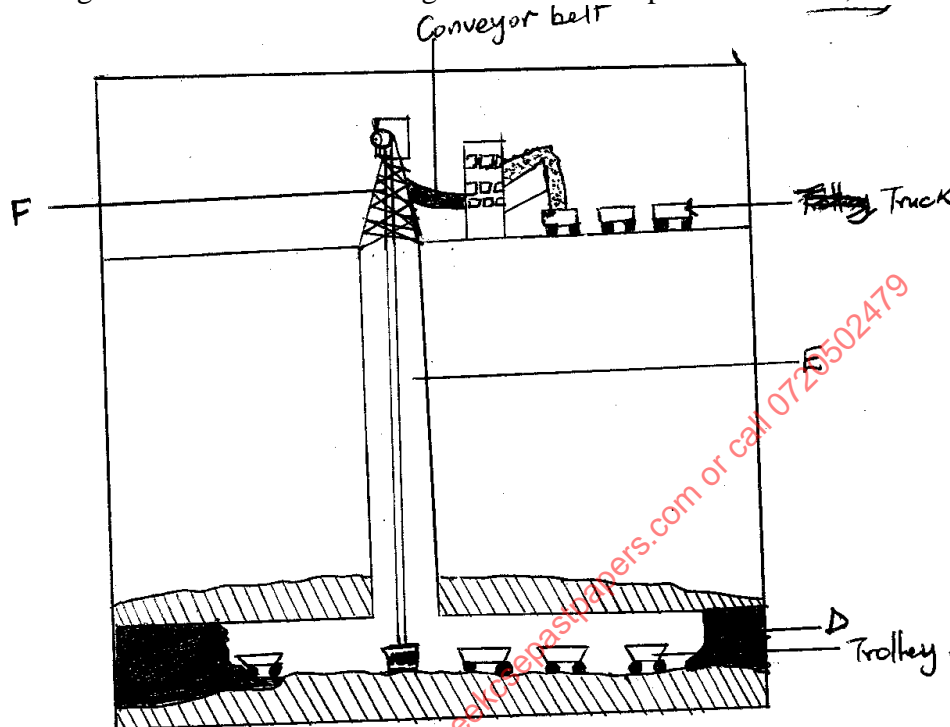
- This paper has **two** sections **A** and **B**
- Answer **ALL** the questions in section **A**. In section **B** answer questions **6** and any other **TWO** questions.

SECTION A	
QUESTION 6	
QUESTION 7	
QUESTION 8	
TOTAL	

SECTION A

Answer *ALL* the questions in this section.

1. (a) The diagram below shows a mining drill. Name the parts marked D, E & F. (2 mks)



- (b) State two factors necessary for the occurrence of oil. (2 mks)
2. (a) Give two characteristics of softwood forests in Canada. (2 mks)
- (b) State three problems that affect forestry in Canada. (3 mks)
3. (a) State three physical conditions necessary for the growing of cocoa. (3 mks)
- (b) Outline two problems which are experienced in cocoa farming in Ghana. (2 mks)
4. (a) Distinguish between balance of trade and balance of payment. (2 mks)
- (b) State three efforts made by the Kenya government to promote external trade. (3 mks)
5. (a) Identify three causes of lightening. (3 mks)
- (b) State two advantages of windstorms. (2 mks)

SECTION B

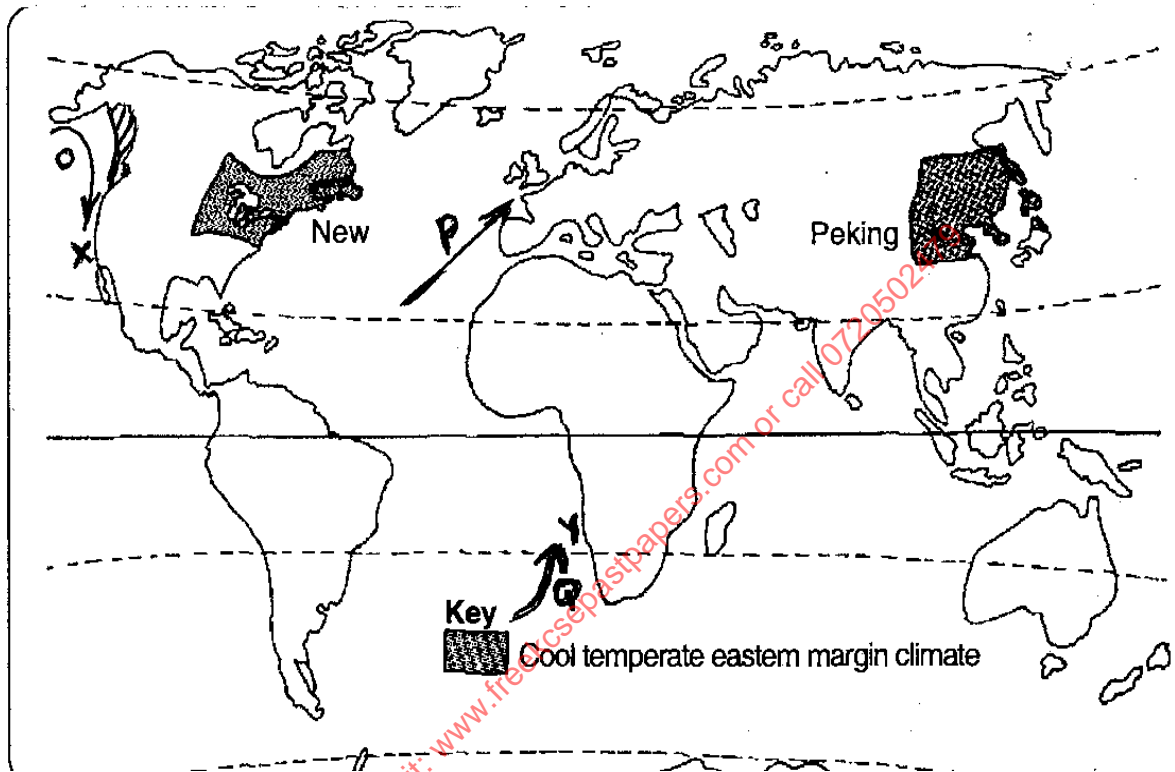
6. The photograph below shows beef farming in Kenya. Use it to answer question (a).



- (a) (i) Identify the type of photograph. (1 mk)
- (ii) Describe the features shown on the photograph. (3 mks)
- (iii) What indicators show that the area is suitable for beef farming. (3 mks)
- (b) Explain four measures taken by the Kenyan government to improve beef farming in Kenya. (8 mks)
- (c) (i) Name two exotic beef cattle kept in Argentina. (2 mks)
- (ii) List two areas in Argentina where beef cattle rearing is practised. (2 mks)
- (iii) Explain three physical favouring beef farming in Argentina. (6 mks)

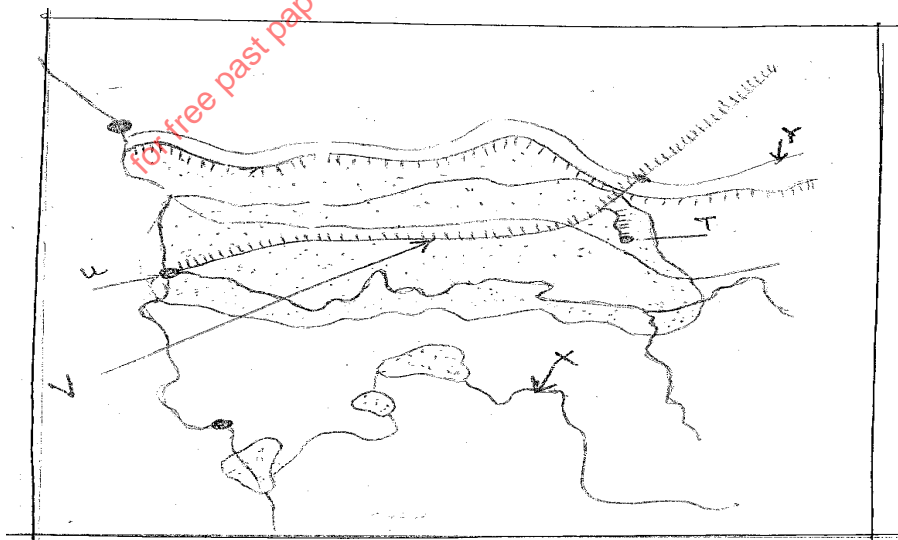
7. (a) (i) Name three types of fish. (3 mks)
- (ii) State three conditions for the growth of planktons in the ocean. (3 mks)

(b) Study the world map provided and answer the questions that follow.



- (i) Name the fishing grounds marked X & Y. (2 mks)
- (ii) Identify the Ocean currents marked O,P, Q. (3 mks)
- (c) Describe three major physical conditions that favour development of fishing ground X. (6 mks)
- (d) (i) Apart from Purse seine method, name three modern methods of fishing. (3 mks)
- (ii) Describe how purse seine method is used to catch fish. (5 mks)

8. (a) (i) What is geothermal power? (2 mks)
- (ii) Mention three locational sites of geothermal power production in Kenya. (3 mks)
- (iii) State four problems facing geothermal power development in Kenya. (4 mks)
- (b) (i) Give three reasons why Kenya must develop wind energy. (3 mks)
- (ii) Name three areas in Kenya where wind mills have been installed. (3 mks)
- (c) (i) What is management of energy. (2 mks)
- (ii) Explain four measures taken by the Kenya government to manage and conserve energy. (8 mks)
9. (a) Define the term cottage industry. (2 mks)
- (b) Outline four reasons why the county government of Nakuru should encourage foreign investors to establish jua-kali industries in the county. (4 mks)
- (c) Explain three factors which may lead to industrial inertia. (6 mks)
- (d) The map below represents the Ruhr industrial region of Germany. Use it to answer the questions that follow.

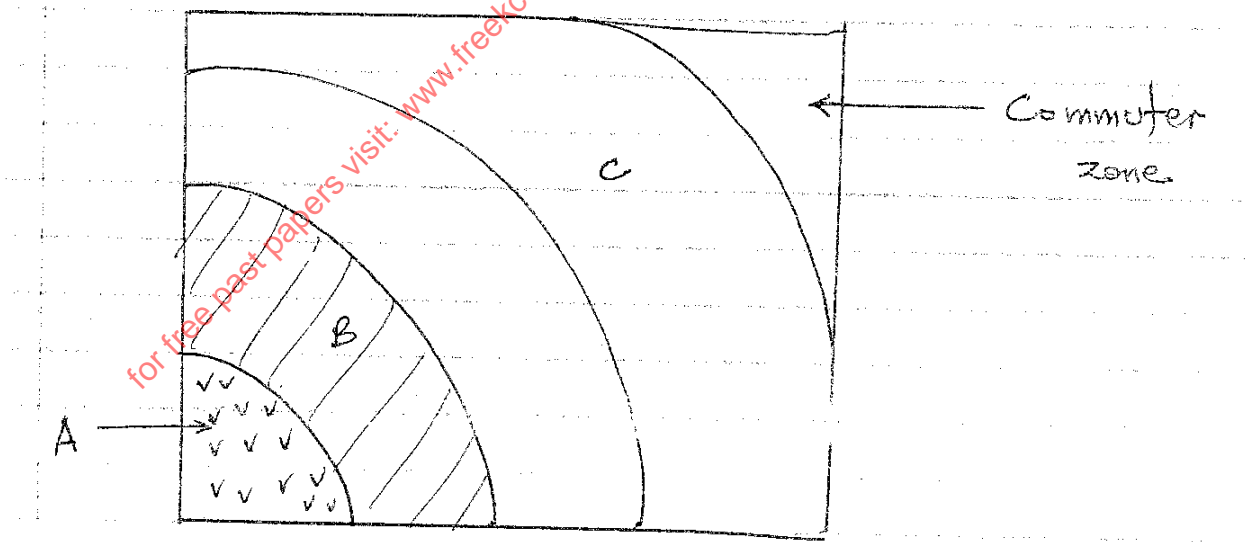


Ruhr – industrial Region and Transportation Lines

- (i) Name the rivers marked X and Y. (2 mks)
- (ii) Identify the towns labeled T and U. (2 mks)
- (iii) Name the canal labeled V. (1 mk)
- (iv) Name any two forms of power used in the Ruhr region apart from coal. (2 mks)
- (v) Explain three factors that led to the growth of industries in the Ruhr region. (6 mks)

10. (a) (i) What is urbanization? (2 mks)
- (ii) State three physical factors which influence the location of settlement. (3 mks)
- (b) Give three social problems experienced in Kisumu city. (3 mks)

(c) The diagram below represents the functional zones of an urban centre. Use it to answer questions (i) and (ii).



- (i) Name the zone marked B. (1 mk)
 - (ii) Give four characteristics of the zone A. (4 mks)
- (d) Explain three factors that led to the growth of growth of Eldoret Town.