

312/2

GEOGRAPHY PAPER 2

MARCH/APRIL 2015

CROSS COUNTRY EXAMS 2015

SECTION A.

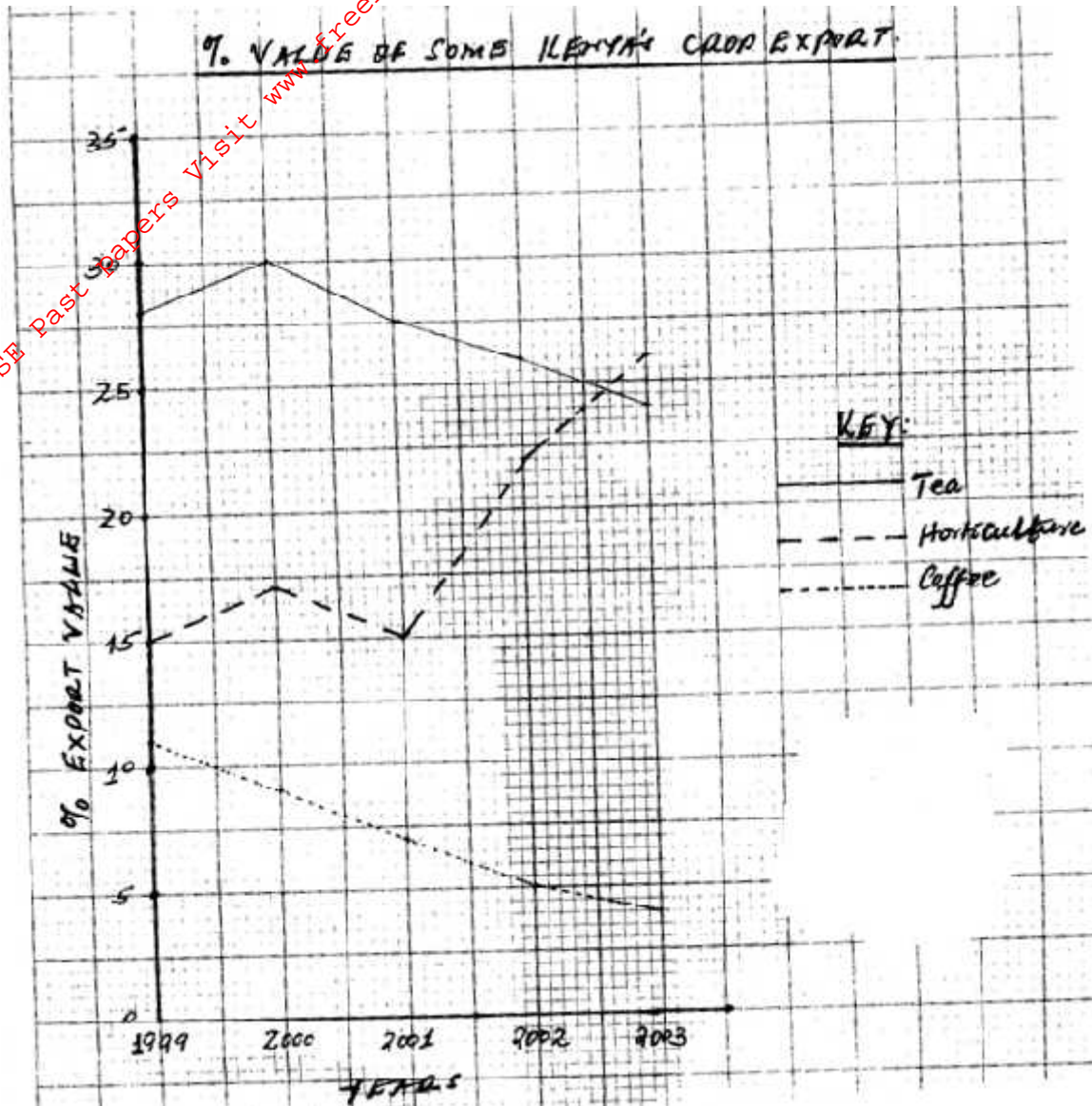
Answer all the questions in section A

- Q1.**(a) What is wildlife? (1mark)
- (b) List **two** physical problems affecting wildlife in Kenya (2marks)
- (c) State the measures being undertaken in East African to manage wildlife (3marks)
- Q2** (a) Name **two** horticultural crops grown in Kenya (2marks)
- (b) State **three** human factors favouring horticultural farming in Kenya. (3marks)
- Q3.**(a) Name **two** exotic breeds of cattle reared in commercial ranches in Kenya (2mark)
- (b) State **three** environmental conditions which favour commercial beef farming in Kenya. (3marks)
- Q4.**(a) Name **two** indigenous softwood tree species found in Kenya. (2marks)
- (b) State **three** characteristics of temperate hardwood forests. (3marks)
- Q5.**(a) What is energy crisis? (2marks)
- (b) State **three** solutions to energy crisis in the world (3marks)

SECTION B:

Answer question six (6) and any other two from the remaining questions

Q6. Comparative line graph

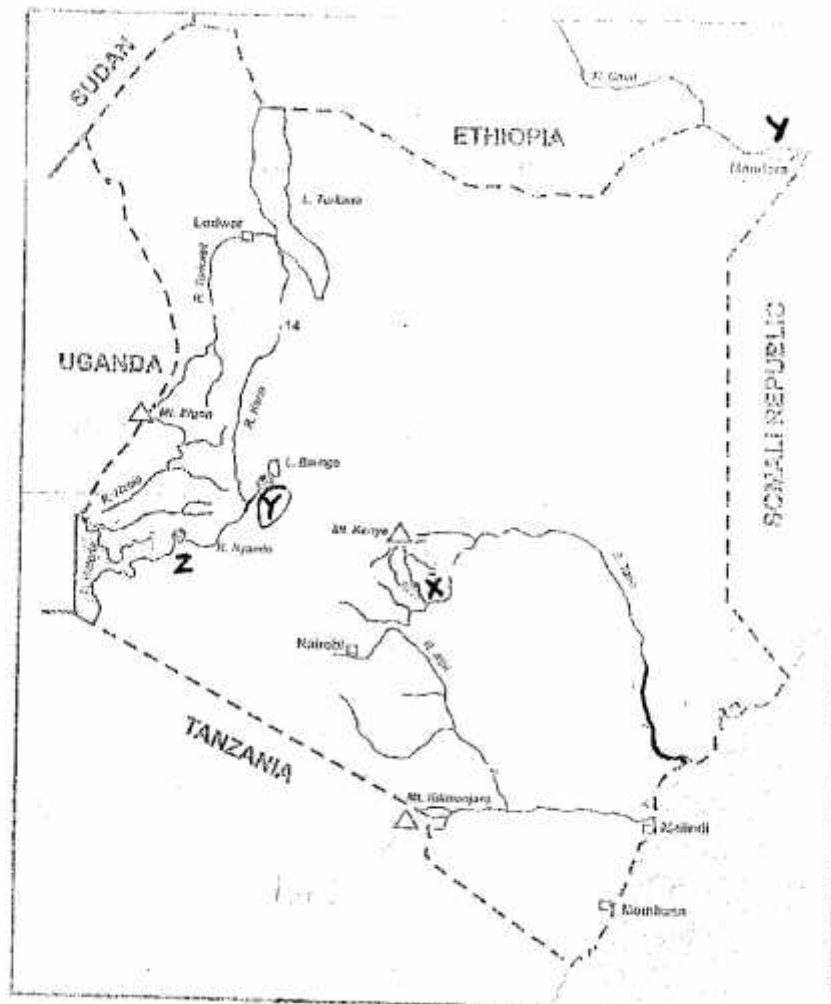


- (a) What was the percentage difference between value exports of tea and horticulture in the year 2000 (1mark)
- (b) Explain **three** factors which may have led to the increased export earnings from horticulture between 1999-2003 (6marks)
- (c) Give **two** advantages of using comparative line graph to represent statistical data (2marks)
- (d) (i) Describe **four** physical factors favouring cocoa growing in Ghana (8marks)
- (ii) Outline the stages of Cocoa growing in Ghana from harvesting to Marketing (5marks)
- (iii) State three physical problems facing cocoa farming in Ghana (3marks)

Q7. (a) (i) Differentiate between land reclamation and land rehabilitation (2marks)

(ii) Name **two** methods of land rehabilitation in Kenya. (2marks)

(b) The map below shows major irrigation schemes in Kenya. Used to answer the questions that follow



(i) Name the irrigation schemes marked X, Y & Z (3marks)

(c) (i) Name **two** crops grown in Perkerra irrigation scheme (2marks)

(ii) Explain **three** physical factors favouring the establishment of perkerra Irrigation scheme. (6marks)

(iii) State **two** solutions to the problems encountered in the scheme (2marks)

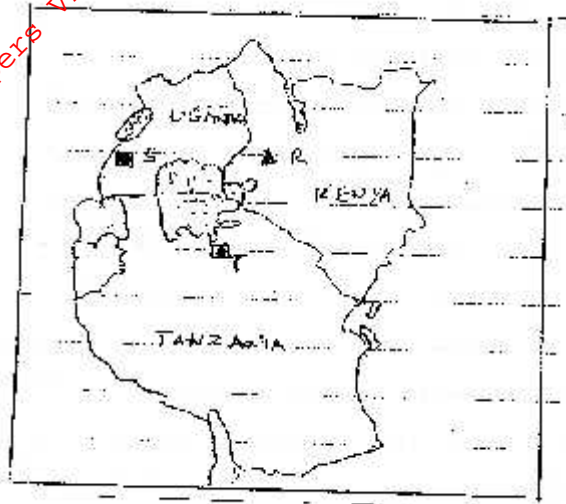
(d) Explain **four** significance of irrigation farming in Kenya. (8marks)

Q8. (a) State **three** ways in which minerals occur. **(3marks)**

(b) Explain how the following factors influence mining:

- Mode of exploitation **(2marks)**
- Transport system. **(2marks)**

(c) Use the map of East Africa below to answer questions



(i) Name the minerals found in the areas marked **R, S** and **T**.

(3marks)

(ii) Describe deep shaft mining method

(6marks)

(d) (i) Name **two** areas where diamond is mined in South Africa.

(2marks)

(ii) Outline the processing of diamond in South Africa.

(5marks)

(iii) State **two** human problems facing diamond mining in South Africa. **(2marks)**

Q9. (a) (i) Define fishing

(1mark)

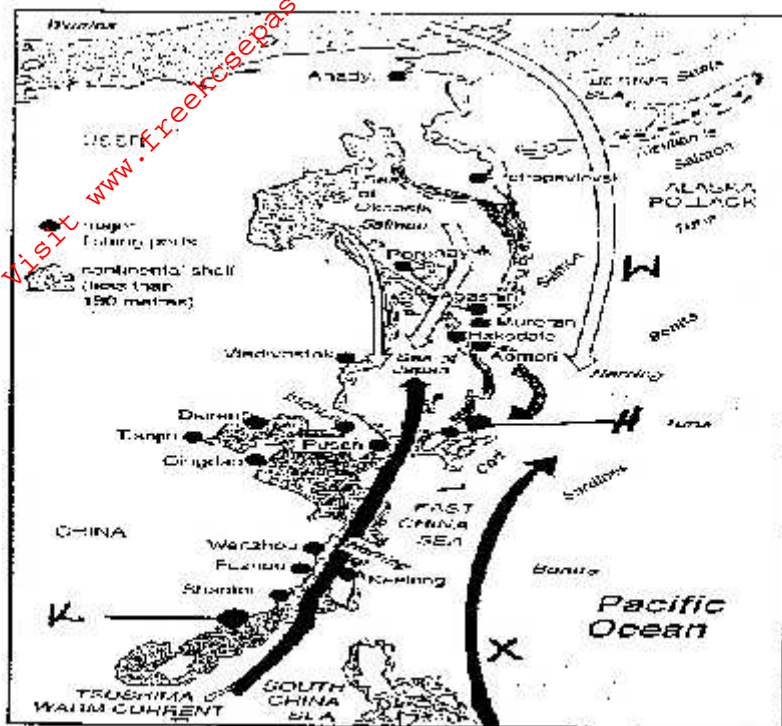
(ii) State **three** factors favouring fishing in L. Victoria

(3marks)

(iii) Name **two** fish species along the Kenya Coast

(2marks)

(b) Use the Map of the N-W Pacific fishing ground to answer the questions that follow:



North-West Pacific fishing grounds

- (i) Identify the ocean current marked **W** and **X** (2marks)
- (ii) Name the major ports marked **H** and **K** (2marks)
- (iii) Describe how drifting method is employed in marine fishing (5marks)
- (c) Compare fishing in Kenya and Japan under the following sub-headings:
 - (i) Technology (2marks)
 - (ii) Nature of the coastline (2marks)
 - (iii) Research (2marks)
- (d) Give **four** conservation measures of fisheries in Kenya (4marks)

- Q10.**(a) (i) Define the term energy. (2marks)
- (ii) Identify the type of energy from the following sources. (3marks)
- Sun
 - Uranium
 - Wind
- (b) (i) Explain **three** physical factors that have influenced the location of Owen Falls hydro-electric power project in Uganda. (6marks)
- (ii) Explain **two** benefits of hydro-electric power project to the economies of East African countries. (4marks)
- (iii) A part from Owen falls dams, name **two** other Hydro-electric power projects in Uganda. (2marks)
- (c) A Mokasa geography class intends to carry out a field study at Olkaria Geothermal Power Plant.
- (i) State **two** objectives of the study (2marks)
 - (ii) Give **three** reasons why a pre-visit would be necessary or their study. (3marks)
 - (iii) What **three** follow-up activities are they likely to engage in after the

Study?

(3marks)

For More Free KCSE Past papers Visit www.freekcsepastpapers.com